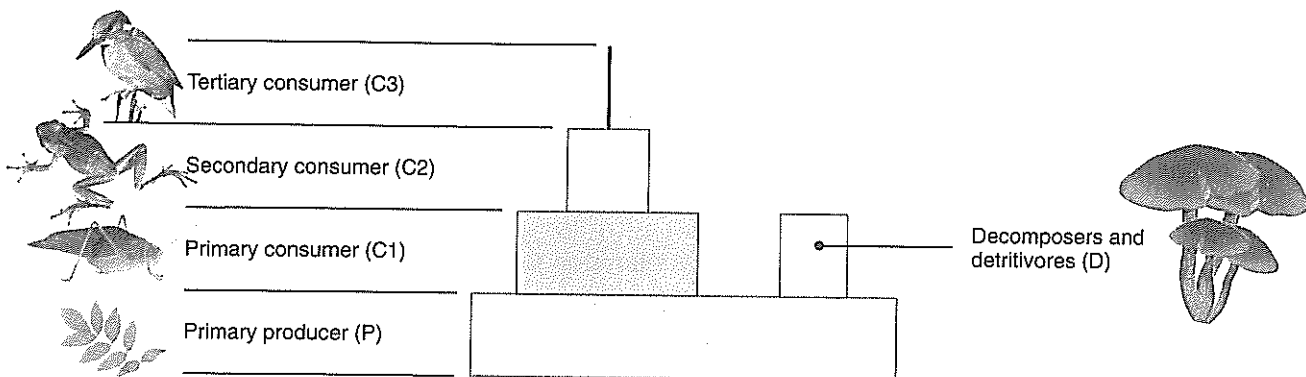


Ecological Pyramids

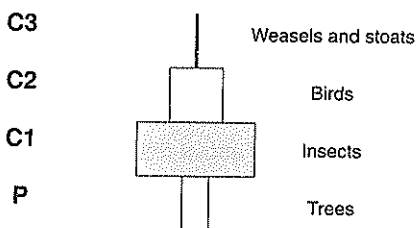
The trophic levels of any ecosystem can be arranged in a pyramid shape. The first trophic level is placed at the bottom and subsequent trophic levels are stacked on top in their 'feeding sequence'. Ecological pyramids can illustrate changes in the numbers, biomass (weight), or energy content of organisms at each level. Each of these three kinds of pyramids tell us

something different about the flow of energy and materials between one trophic level and the next. The type of pyramid you choose in order to express information about the ecosystem will depend on what particular features of the ecosystem you are interested in and, of course, the type of data you have collected.



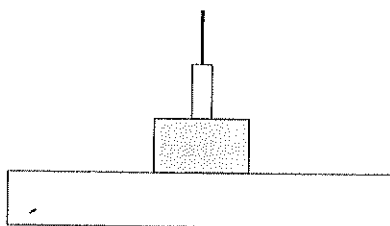
The generalised ecological pyramid pictured above shows a conventional pyramid shape, with a large number (or biomass) of producers forming the base for an increasingly small number (or biomass) of consumers. Decomposers are placed at the level of the primary consumers and off to the side. They may obtain energy

from many different trophic levels and so do not fit into the conventional pyramid structure. For any particular ecosystem at any one time (e.g. the forest ecosystem below), the shape of this typical pyramid can vary greatly depending on whether the trophic relationships are expressed as numbers, biomass or energy.



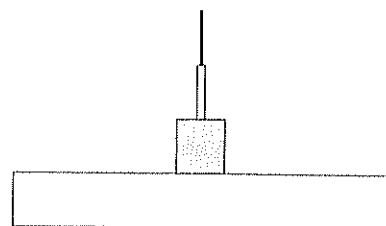
Numbers in a forest community

Pyramids of numbers display the number of individual organisms at each trophic level. The pyramid above has few producers, but they may be of a very large size (e.g. trees). This gives an 'inverted pyramid', although not all pyramids of numbers are like this.



Biomass in a forest community

Biomass pyramids measure the 'weight' of biological material at each trophic level. Water content of organisms varies, so 'dry weight' is often used. Organism size is taken into account, so meaningful comparisons of different trophic levels are possible.



Energy in a forest community

Pyramids of energy are often very similar to biomass pyramids. The energy content at each trophic level is generally comparable to the biomass (i.e. similar amounts of dry biomass tend to have about the same energy content).

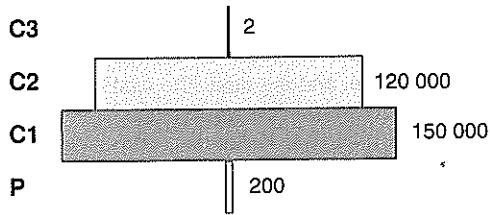
Communities

1. Describe what the three types of ecological pyramids measure:

- (a) Number pyramid: _____
- (b) Biomass pyramid: _____
- (c) Energy pyramid: _____

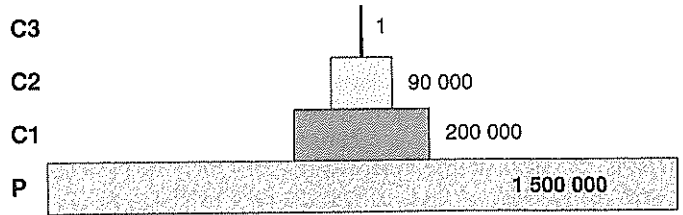
2. Explain the advantage of using a biomass or energy pyramid rather than a pyramid of numbers to express the relationship between different trophic levels:

3. Explain why it is possible for the forest community (on the next page) to have very few producers supporting a large number of consumers:



Pyramid of numbers: forest community

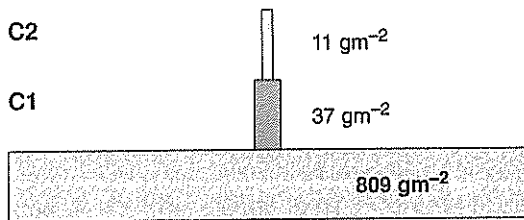
In a forest community a few producers may support a large number of consumers. This is due to the large size of the producers; large trees can support many individual consumer organisms. The example above shows the numbers at each trophic level for an oak forest in England, in an area of 10 m².



Pyramid of numbers: grassland community

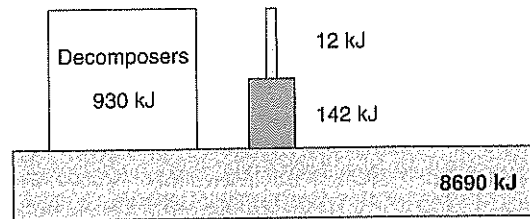
In a grassland community a large number of producers are required to support a much smaller number of consumers. This is due to the small size of the producers. Grass plants can support only a few individual consumer organisms and take time to recover from grazing pressure. The example above shows the numbers at each trophic level for a derelict grassland area (10 m²) in Michigan, United States.

Pyramids for a Plankton Community



Biomass

The pyramids of biomass and energy are virtually identical. The two pyramids illustrated here relate to the same hypothetical plankton community. A large biomass of producers supports a smaller biomass of consumers. The energy at each trophic level is reduced with each



Energy

progressive stage in the food chain. As a general rule, a maximum of 10% of the energy is passed on to the next level in the food chain. The remaining energy is lost due to respiration, waste, and heat.

4. Determine the **energy transfer** between trophic levels in the plankton community example in the above diagram:

(a) Between producers and the primary consumers: _____

(b) Between the primary consumers and the secondary consumers: _____

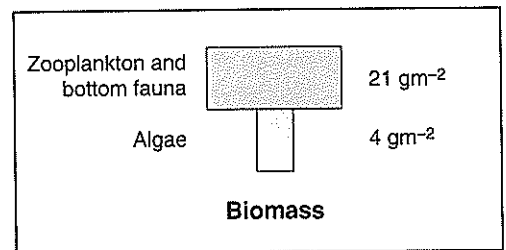
(c) Explain why the energy passed on from the producer to primary consumers is considerably less than the normally expected 10% occurring in most other communities (describe where the rest of the energy was lost to):

(d) After the producers, which trophic group has the greatest energy content: _____

(e) Give a likely explanation why this is the case: _____

An unusual biomass pyramid

The biomass pyramids of some ecosystems appear rather unusual with an inverted shape. The first trophic level has a lower biomass than the second level. What this pyramid does not show is the rate at which the producers (algae) are reproducing in order to support the larger biomass of consumers.



5. Give a possible explanation of how a small biomass of producers (algae) can support a larger biomass of consumers (zooplankton):
